

Please check the examination details below before entering your candidate information

Candidate surname

Other names

Centre Number

Candidate Number

| | | | | |
|--|--|--|--|--|
| | | | | |
|--|--|--|--|--|

| | | | |
|--|--|--|--|
| | | | |
|--|--|--|--|

Pearson Edexcel International GCSE

Time 2 hours

Paper
reference

4PM1/01

Further Pure Mathematics PAPER 1



Calculators may be used.

Total Marks

Instructions

- Use **black** ink or ball-point pen.
- **Fill in the boxes** at the top of this page with your name, centre number and candidate number.
- Answer **all** questions.
- Without sufficient working, correct answers may be awarded no marks.
- Answer the questions in the spaces provided – *there may be more space than you need.*
- You must **NOT** write anything on the formulae page. Anything you write on the formulae page will gain NO credit.

Information

- The total mark for this paper is 100.
- The marks for **each** question are shown in brackets – *use this as a guide as to how much time to spend on each question.*

Advice

- Read each question carefully before you start to answer it.
- Check your answers if you have time at the end.

Turn over ►

P71661A

©2022 Pearson Education Ltd.

Q:1/1/1/1




Pearson

International GCSE in Further Pure Mathematics Formulae sheet

Mensuration

Surface area of sphere = $4\pi r^2$

Curved surface area of cone = $\pi r \times$ slant height

Volume of sphere = $\frac{4}{3}\pi r^3$

Series

Arithmetic series

Sum to n terms, $S_n = \frac{n}{2}[2a + (n - 1)d]$

Geometric series

Sum to n terms, $S_n = \frac{a(1 - r^n)}{(1 - r)}$

Sum to infinity, $S_\infty = \frac{a}{1 - r} \quad |r| < 1$

Binomial series

$$(1 + x)^n = 1 + nx + \frac{n(n-1)}{2!}x^2 + \dots + \frac{n(n-1)\dots(n-r+1)}{r!}x^r + \dots \quad \text{for } |x| < 1, n \in \mathbb{Q}$$

Calculus

Quotient rule (differentiation)

$$\frac{d}{dx} \left(\frac{f(x)}{g(x)} \right) = \frac{f'(x)g(x) - f(x)g'(x)}{[g(x)]^2}$$

Trigonometry

Cosine rule

In triangle ABC : $a^2 = b^2 + c^2 - 2bc \cos A$

$$\tan \theta = \frac{\sin \theta}{\cos \theta}$$

$$\sin(A + B) = \sin A \cos B + \cos A \sin B$$

$$\sin(A - B) = \sin A \cos B - \cos A \sin B$$

$$\cos(A + B) = \cos A \cos B - \sin A \sin B$$

$$\cos(A - B) = \cos A \cos B + \sin A \sin B$$

$$\tan(A + B) = \frac{\tan A + \tan B}{1 - \tan A \tan B}$$

$$\tan(A - B) = \frac{\tan A - \tan B}{1 + \tan A \tan B}$$

Logarithms

$$\log_a x = \frac{\log_b x}{\log_b a}$$

DO NOT WRITE IN THIS AREA

DO NOT WRITE IN THIS AREA

DO NOT WRITE IN THIS AREA



DO NOT WRITE IN THIS AREA

DO NOT WRITE IN THIS AREA

DO NOT WRITE IN THIS AREA

Answer all TEN questions.

Write your answers in the spaces provided.

You must write down all the stages in your working.

- 1 Given that $\frac{2\sqrt{3} - 4}{3\sqrt{3} + 5}$ can be written in the form $a + b\sqrt{3}$ where a and b are integers,

find, without using a calculator, the value of a and the value of b

Show your working clearly.

(3)

Area with horizontal dotted lines for working.

(Total for Question 1 is 3 marks)



P 7 1 6 6 1 A 0 3 3 2

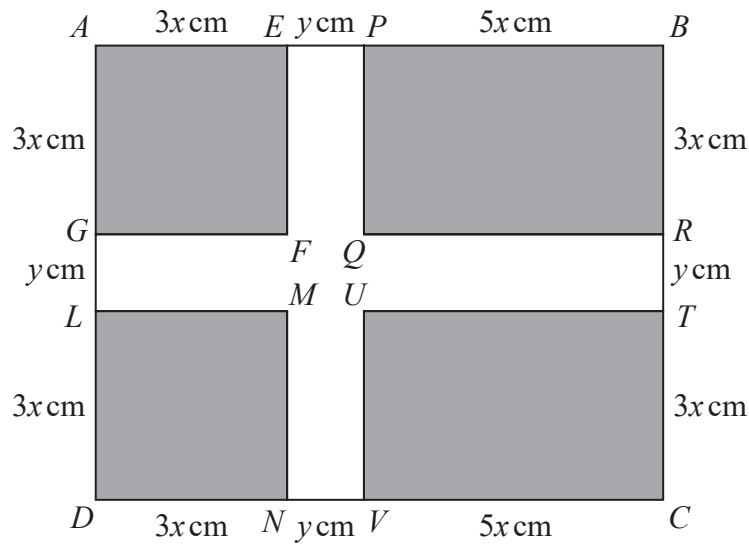


Diagram **NOT** accurately drawn

Figure 1

Figure 1 shows the design for a flag consisting of a white cross on a grey background.

$AEFG$ and $DLMN$ are squares with sides of length $3x$ cm.

$BPQR$ and $CTUV$ are rectangles with sides of length $5x$ cm and $3x$ cm.

The width of the cross is y cm.

The total area of the flag is H cm²

(a) Write down an expression, in terms of x and y , for H .

(1)

Given that the area of the cross is K cm²

(b) show that $K = 14xy + y^2$

(3)

The total area of the flag is to be 3432 cm² and the area of the cross is to be 1080 cm²

(c) Find the value of x and the value of y

(5)

.....

.....

.....

.....

.....

.....

.....

.....

DO NOT WRITE IN THIS AREA

DO NOT WRITE IN THIS AREA

DO NOT WRITE IN THIS AREA



Question 2 continued

DO NOT WRITE IN THIS AREA

DO NOT WRITE IN THIS AREA

DO NOT WRITE IN THIS AREA

Handwriting practice area with 25 horizontal dotted lines.



P 7 1 6 6 1 A 0 5 3 2

Question 2 continued

Area with horizontal dotted lines for writing.

DO NOT WRITE IN THIS AREA

DO NOT WRITE IN THIS AREA

DO NOT WRITE IN THIS AREA



Question 2 continued

DO NOT WRITE IN THIS AREA

DO NOT WRITE IN THIS AREA

DO NOT WRITE IN THIS AREA

Handwriting practice area with 20 horizontal dotted lines.

(Total for Question 2 is 9 marks)



P 7 1 6 6 1 A 0 7 3 2

Question 3 continued

DO NOT WRITE IN THIS AREA

DO NOT WRITE IN THIS AREA

DO NOT WRITE IN THIS AREA

Area with horizontal dotted lines for writing.

(Total for Question 3 is 7 marks)



P 7 1 6 6 1 A 0 9 3 2

Question 4 continued

DO NOT WRITE IN THIS AREA

DO NOT WRITE IN THIS AREA

DO NOT WRITE IN THIS AREA

Area with horizontal dotted lines for writing.

(Total for Question 4 is 7 marks)



P 7 1 6 6 1 A 0 1 1 3 2

Question 5 continued

DO NOT WRITE IN THIS AREA

DO NOT WRITE IN THIS AREA

DO NOT WRITE IN THIS AREA

Handwriting practice area with 25 horizontal dotted lines.



P 7 1 6 6 1 A 0 1 3 3 2

Question 5 continued

Area with horizontal dotted lines for writing.

DO NOT WRITE IN THIS AREA

DO NOT WRITE IN THIS AREA

DO NOT WRITE IN THIS AREA



Question 5 continued

DO NOT WRITE IN THIS AREA

DO NOT WRITE IN THIS AREA

DO NOT WRITE IN THIS AREA


Area with horizontal dotted lines for writing.

(Total for Question 5 is 11 marks)



P 7 1 6 6 1 A 0 1 5 3 2

Question 6 continued



DO NOT WRITE IN THIS AREA

DO NOT WRITE IN THIS AREA

DO NOT WRITE IN THIS AREA

.....

.....

.....

.....

.....

.....

Turn over for a spare grid if you need to redraw your graph.



P 7 1 6 6 1 A 0 1 7 3 2

Question 6 continued

Handwriting practice area with 25 horizontal dotted lines.

DO NOT WRITE IN THIS AREA

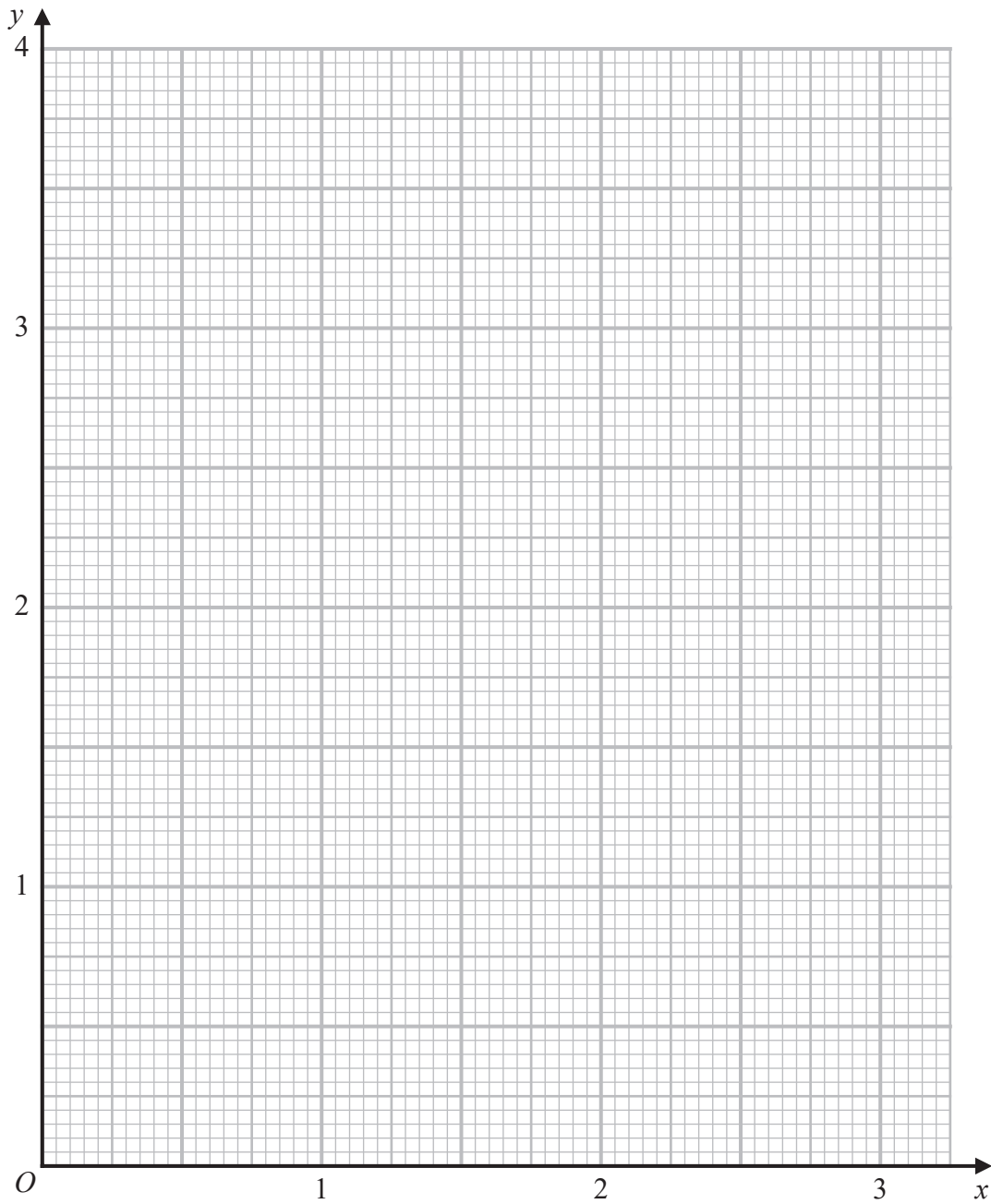
DO NOT WRITE IN THIS AREA

DO NOT WRITE IN THIS AREA



Question 6 continued

Only use this grid if you need to redraw your graph.



DO NOT WRITE IN THIS AREA

DO NOT WRITE IN THIS AREA

DO NOT WRITE IN THIS AREA

.....

.....

.....

.....

.....

(Total for Question 6 is 11 marks)



Question 7 continued

DO NOT WRITE IN THIS AREA

DO NOT WRITE IN THIS AREA

DO NOT WRITE IN THIS AREA

Handwriting practice area with 25 horizontal dotted lines.



P 7 1 6 6 1 A 0 2 1 3 2

Question 7 continued

Area with horizontal dotted lines for writing.

DO NOT WRITE IN THIS AREA

DO NOT WRITE IN THIS AREA

DO NOT WRITE IN THIS AREA



Question 7 continued

DO NOT WRITE IN THIS AREA

DO NOT WRITE IN THIS AREA

DO NOT WRITE IN THIS AREA

Area with horizontal dotted lines for writing.

(Total for Question 7 is 15 marks)



P 7 1 6 6 1 A 0 2 3 3 2

Question 8 continued

DO NOT WRITE IN THIS AREA

DO NOT WRITE IN THIS AREA

DO NOT WRITE IN THIS AREA

Handwriting practice area consisting of 28 horizontal dotted lines.

(Total for Question 8 is 7 marks)



P 7 1 6 6 1 A 0 2 5 3 2

9

$$f(x) = 3x^4 + 4x^3 - 36x^2 + 64$$

Given that $f(x)$ can be written in the form $(x - 2)^2(ax^2 + bx + c)$

(a) find the value of a , the value of b and the value of c

(4)

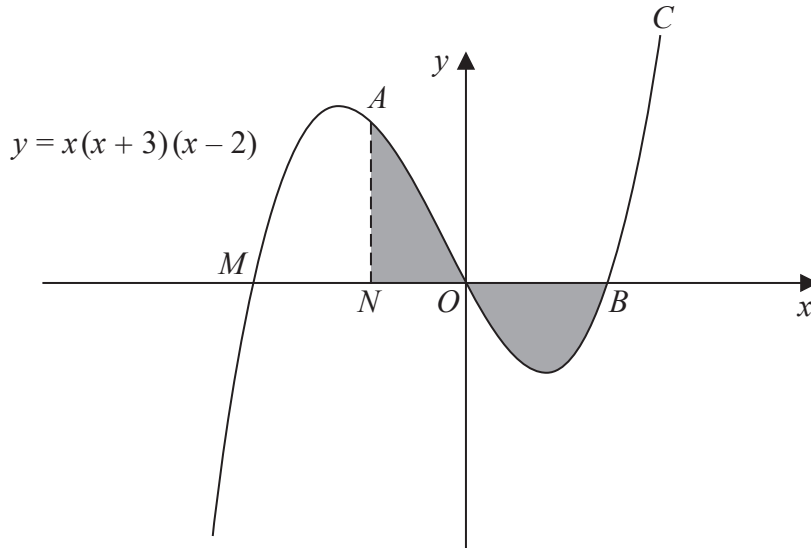


Diagram **NOT** accurately drawn

Figure 3

Figure 3 shows a sketch of part of the curve C with equation $y = x(x + 3)(x - 2)$

The curve C crosses the x -axis at the point M , the origin and the point B .

The point N lies on the x -axis between M and O .

The point A lies on C such that AN is parallel to the y -axis.

The area of the shaded region bounded by the curve and OB is numerically equal to the area of the shaded region bounded by the curve, ON and NA .

Given that the coordinates of N are $(n, 0)$,

(b) use algebraic integration to show that n satisfies the equation

$$(x - 2)^2(3x^2 + 16x + 16) = 0 \tag{7}$$

(c) Hence find the exact coordinates of A .

(5)

.....

.....

.....

.....

.....

.....

.....

DO NOT WRITE IN THIS AREA

DO NOT WRITE IN THIS AREA

DO NOT WRITE IN THIS AREA



Question 9 continued

DO NOT WRITE IN THIS AREA

DO NOT WRITE IN THIS AREA

DO NOT WRITE IN THIS AREA

Handwriting practice area with 25 horizontal dotted lines.



P 7 1 6 6 1 A 0 2 7 3 2

Question 9 continued

Area with horizontal dotted lines for writing.

DO NOT WRITE IN THIS AREA

DO NOT WRITE IN THIS AREA

DO NOT WRITE IN THIS AREA



Question 9 continued

DO NOT WRITE IN THIS AREA

DO NOT WRITE IN THIS AREA

DO NOT WRITE IN THIS AREA

Area with horizontal dotted lines for writing.

(Total for Question 9 is 16 marks)



P 7 1 6 6 1 A 0 2 9 3 2

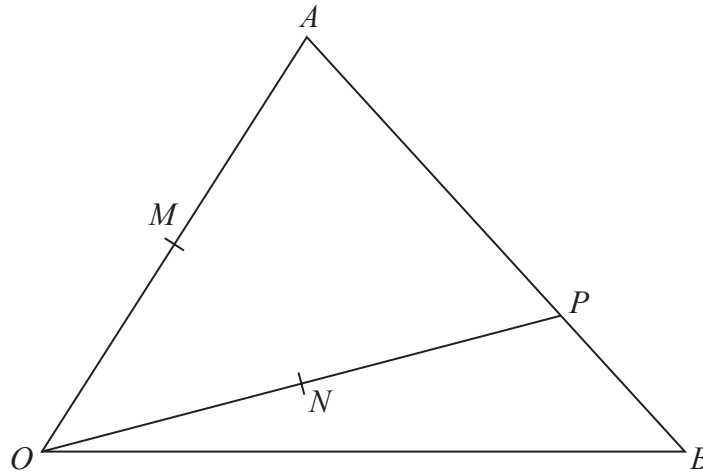


Diagram NOT accurately drawn

Figure 4

Figure 4 shows triangle OAB in which

$$\vec{OA} = \mathbf{a} \text{ and } \vec{OB} = \mathbf{b}$$

The point P lies on AB such that $AP:PB = 3:1$

The point M is the midpoint of OA and the point N is the midpoint of OP .

(a) Find, as simplified expressions in terms of \mathbf{a} and \mathbf{b} , the vector

- (i) \vec{OP} (ii) \vec{MN}

(4)

The point C lies on OB such that ANC is a straight line.

(b) Using a vector method, find the vector \vec{OC} as a simplified expression in terms of \mathbf{b}

(6)

Given that $\frac{\text{area of quadrilateral } AMNP}{\text{area of triangle } OAB} = K$

(c) find the exact value of K

(4)

.....

.....

.....

.....

.....

.....

.....

.....

.....

.....

DO NOT WRITE IN THIS AREA

DO NOT WRITE IN THIS AREA

DO NOT WRITE IN THIS AREA



Question 10 continued

DO NOT WRITE IN THIS AREA

DO NOT WRITE IN THIS AREA

DO NOT WRITE IN THIS AREA

Area with horizontal dotted lines for writing.



P 7 1 6 6 1 A 0 3 1 3 2

Question 10 continued

Area with horizontal dotted lines for writing.

(Total for Question 10 is 14 marks)

TOTAL FOR PAPER IS 100 MARKS

DO NOT WRITE IN THIS AREA

DO NOT WRITE IN THIS AREA

DO NOT WRITE IN THIS AREA

